

Prénom : _____

Cahier de

calculs

additions

= 10



1) Additionne.

4 cubes + 3 cubes =

5 cubes + 3 cubes =

5 cubes + 4 cubes =

1 cube + 7 cubes =

2 cubes + 3 cubes =

1) Additionne.

6 cubes + 5 cubes = []

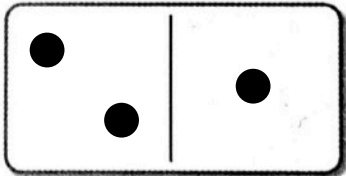
6 cubes + 6 cubes = []

3 cubes + 8 cubes = []


1 cube + 9 cubes = []

2 cubes + 7 cubes = []


1) Additionne et écris le calcul.



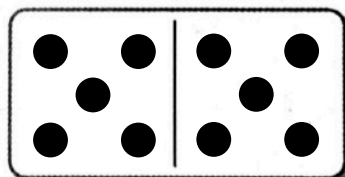
___ + ___ = ___



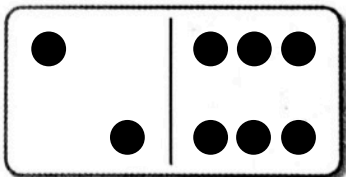
___ + ___ = ___



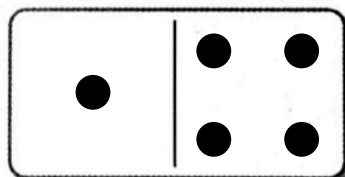
___ + ___ = ___



___ + ___ = ___




___ + ___ = ___




___ + ___ = ___

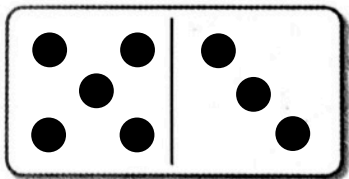
1) Additionne et écris le calcul.



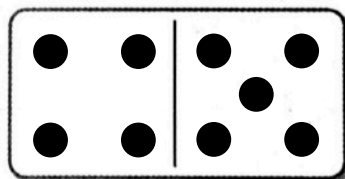
$$\underline{\quad} + \underline{\quad} = \underline{\quad}$$




$$\underline{\quad} + \underline{\quad} = \underline{\quad}$$



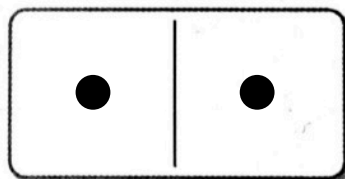
$$\underline{\quad} + \underline{\quad} = \underline{\quad}$$



$$\underline{\quad} + \underline{\quad} = \underline{\quad}$$

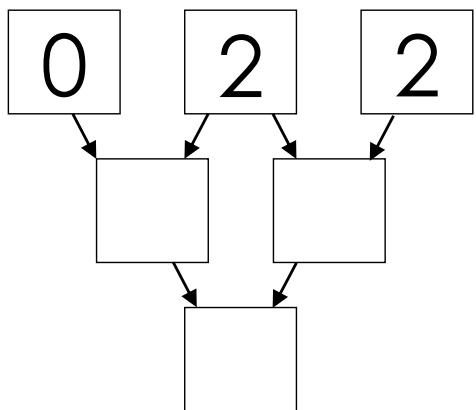
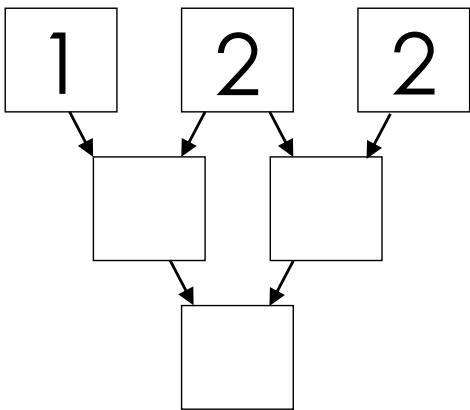
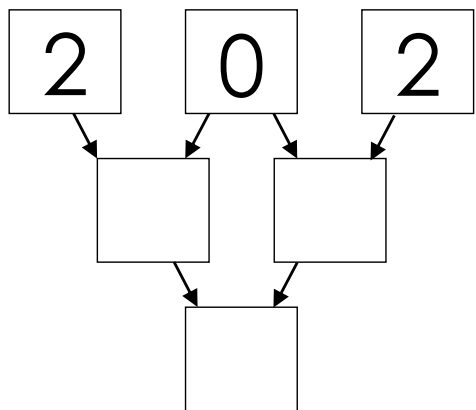
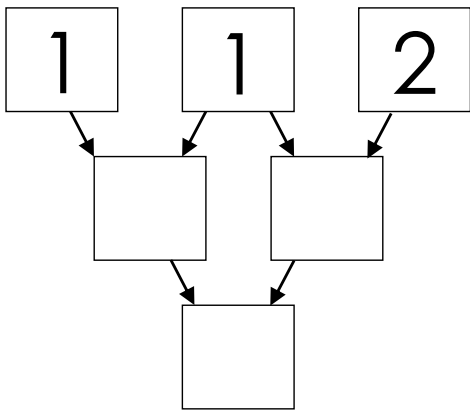
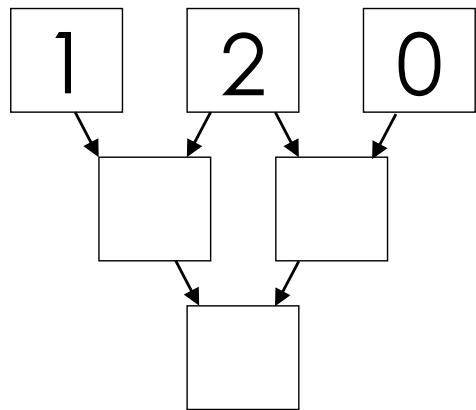
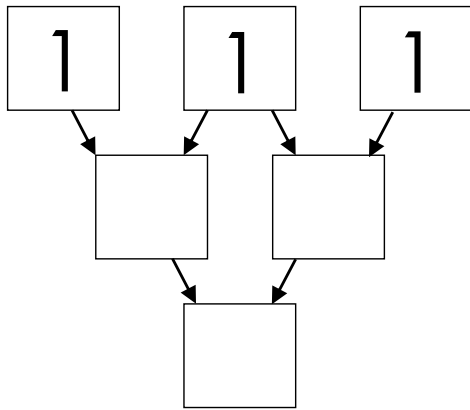


$$\underline{\quad} + \underline{\quad} = \underline{\quad}$$

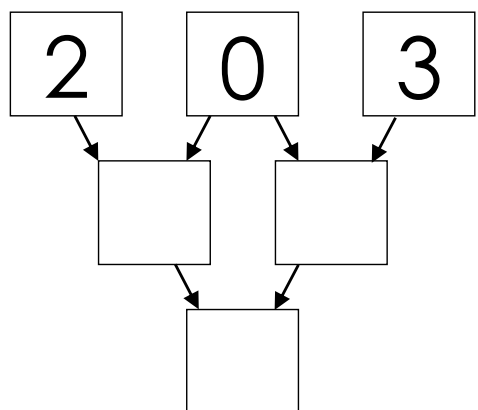
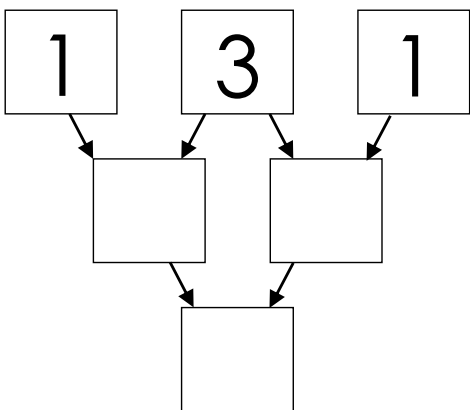
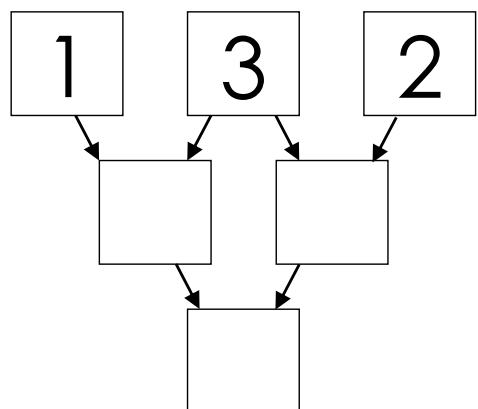
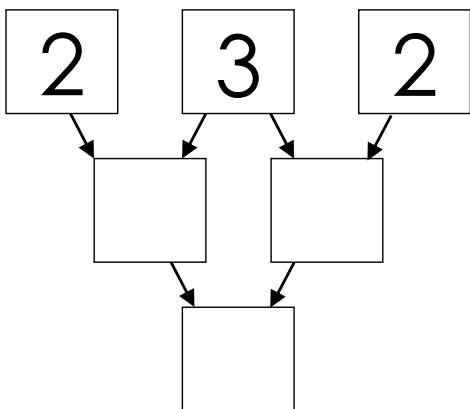
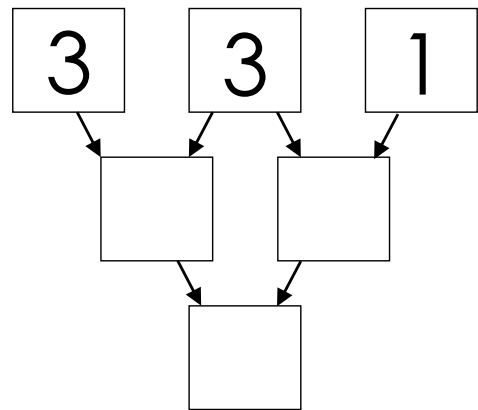
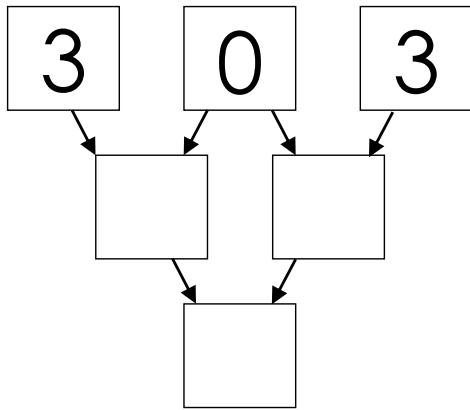


$$\underline{\quad} + \underline{\quad} = \underline{\quad}$$

1) Additionne les nombres en suivant les flèches.



1) Additionne les nombres en suivant les flèches.



1) Additionne et écris le calcul.

3		3
---	--	---

_____ + _____ = _____

2		1
---	--	---

_____ + _____ = _____

6		3
---	--	---

_____ + _____ = _____

5		2
---	--	---

_____ + _____ = _____

1		1
---	--	---

_____ + _____ = _____

4		3
---	--	---

_____ + _____ = _____

1) Additionne et écris le calcul.

6		1
---	--	---

_____ + _____ = _____

5		4
---	--	---

_____ + _____ = _____

4		4
---	--	---

_____ + _____ = _____

2		2
---	--	---

_____ + _____ = _____

5		5
---	--	---

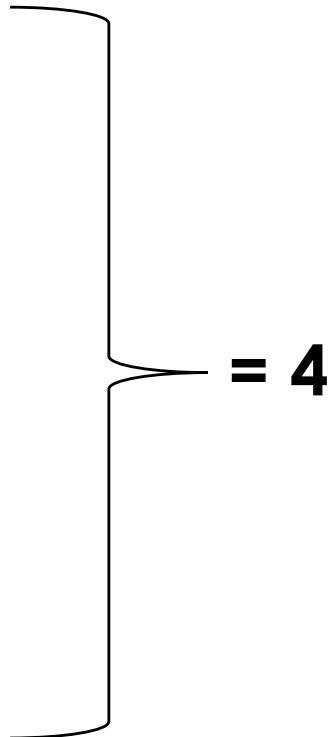
_____ + _____ = _____

4		2
---	--	---

_____ + _____ = _____

1) Ecris les calculs.

0	+	
1	+	
2	+	
3	+	
4	+	



5 =

0	+	
1	+	
2	+	
3	+	
4	+	

1) Ecris les calculs.

0	+	
1	+	
2	+	
3	+	
4	+	
5	+	
6	+	
7	+	
8	+	
9	+	

} = 10

1) Complète les calculs.

= 4

2 +

0 +

4 +

1 +

3 +

= 5

2 +

0 +

4 +

1 +

3 +

