

1 Fiche révision mathématiques

Prénom : _____

Manu a 25 livres chez lui. Il en donne 12 à sa tante.

Combien de livres lui reste-t-il?

Calcul : _____

Réponse : _____

centaine(s) dizaine(s) unité(s)

	1	7	6
+	2	4	7

centaine(s) dizaine(s) unité(s)

	1	7	0
+	2	4	9

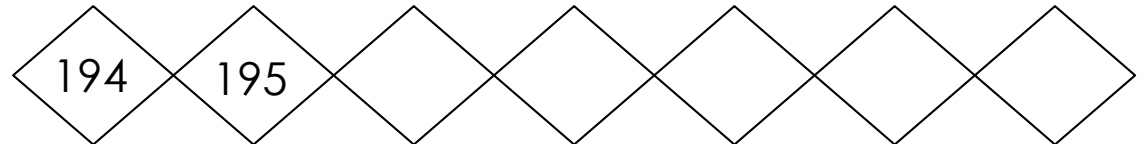
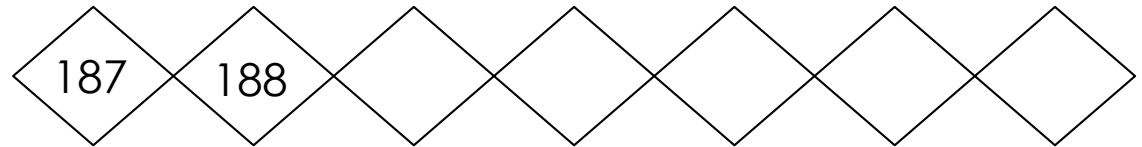
7 - 2 = 9 - 4 = 5 - 0 =

5 - 3 = 4 - 1 = 5 - 2 =

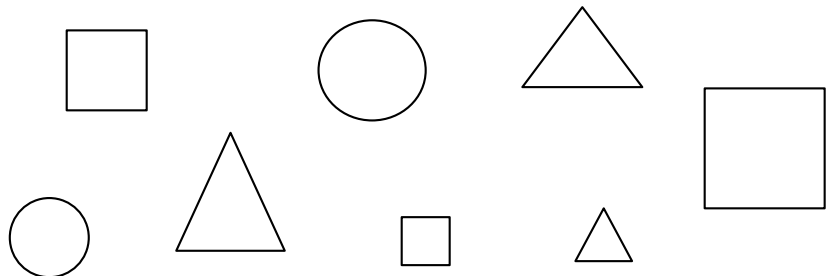
6 - 5 = 2 - 0 = 8 - 3 =

6 - 6 = 10 - 5 = 0 - 0 =

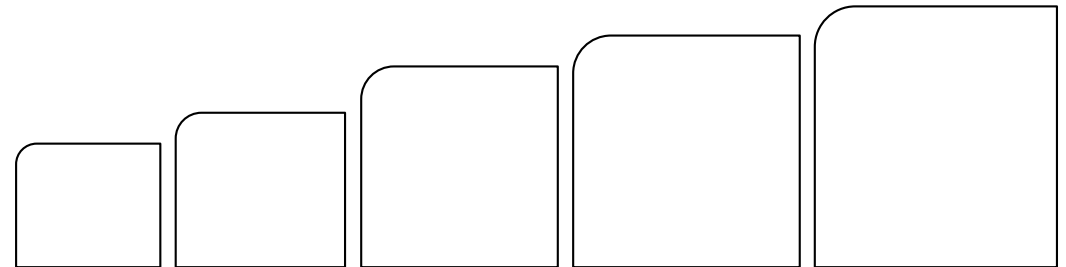
9 - 8 = 8 - 7 = 6 - 1 =



carré = vert rond = bleu triangle = jaune



174 - 196 - 189 - 199 - 180



Mon chat a attrapé 12 souris hier et 14 aujourd'hui.

Combien de souris a-t-il attrapé ?

Calcul : _____

Réponse : _____

centaine(s) dizaine(s) unité(s)

	3	5	2
+	1	7	8

centaine(s) dizaine(s) unité(s)

	2	3	4
+	1	8	7

$8 - 1 = \dots$

$6 - 6 = \dots$

$8 - 2 = \dots$

$9 - 5 = \dots$

$6 - 2 = \dots$

$9 - 4 = \dots$

$4 - 2 = \dots$

$9 - 3 = \dots$

$7 - 2 = \dots$

$9 - 9 = \dots$

$9 - 2 = \dots$

$4 - 1 = \dots$

Avant - après !

	174	
--	-----	--

	179	
--	-----	--

	181	
--	-----	--

	188	
--	-----	--

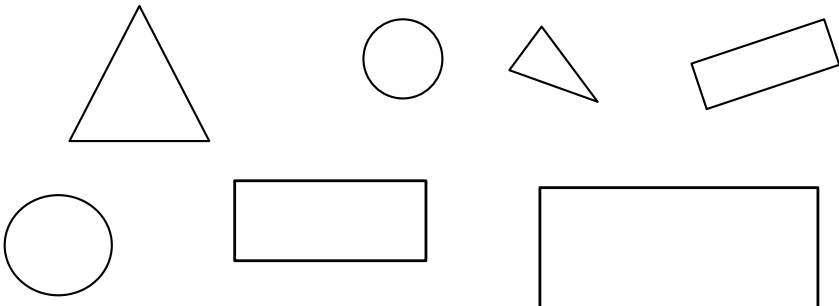
	193	
--	-----	--

	199	
--	-----	--

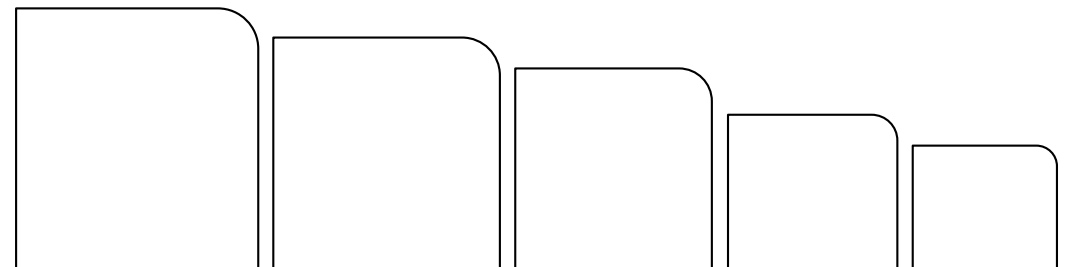
rond = vert

rectangle = bleu

triangle = jaune



198 - 184 - 195 - 181 - 191



Mon frère a 32 bonbons. Il en mange 11.

Combien de bonbons lui reste-t-il ?

Calcul : _____

Réponse : _____

$3 - 1 = \dots$

$9 - 1 = \dots$

$2 - 2 = \dots$

$9 - 3 = \dots$

$10 - 0 = \dots$

$6 - 5 = \dots$

$9 - 6 = \dots$

$5 - 2 = \dots$

$9 - 2 = \dots$

$6 - 4 = \dots$

$6 - 6 = \dots$

$10 - 1 = \dots$

$7 - 0 = \dots$

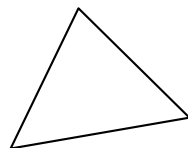

$9 - 8 = \dots$

$6 - 1 = \dots$

carré = vert

rectangle = bleu

triangle = jaune



< ou >

$187 \text{ _____ } 199$


$197 \text{ _____ } 195$

$193 \text{ _____ } 198$

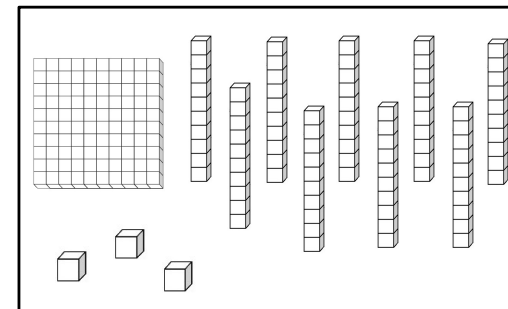
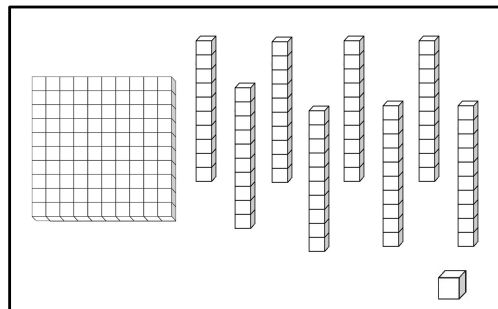
$168 \text{ _____ } 154$

$188 \text{ _____ } 196$

$194 \text{ _____ } 186$



Il y a _____
billes.



Sara a vu 25 canards et 31 cygnes.

Combien Sara a-t-elle vu d'animaux ?

Calcul : _____

Réponse : _____

$4 - 4 = \dots$

$9 - 7 = \dots$

$7 - 3 = \dots$

$9 - 1 = \dots$

$10 - 1 = \dots$

$9 - 6 = \dots$

$2 - 1 = \dots$

$1 - 1 = \dots$

$8 - 4 = \dots$

$10 - 2 = \dots$

$8 - 5 = \dots$


$4 - 3 = \dots$

$7 - 5 = \dots$

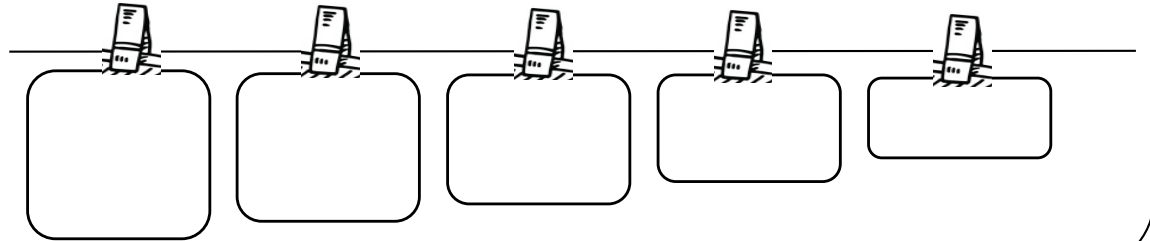
$10 - 0 = \dots$

$5 - 3 = \dots$

Dessine un triangle à l'intérieur du carré et un rond à droite du carré.



$185 - 178 - 189 - 198 - 195$






175

176

188

189



180

190

5 Fiche révision mathématiques

Prénom : _____

Polo a reçu 25 peluches. Il en donne 12 à Fanny.

Combien lui reste-t-il de peluches ?

Calcul : _____

Réponse : _____


$2 + \dots = 10$ $1 + \dots = 10$

$7 + \dots = 10$ $3 + \dots = 10$

$0 + \dots = 10$ $9 + \dots = 10$

$6 + \dots = 10$ $4 + \dots = 10$

Dessine un carré sur le rectangle et un triangle à gauche du carré.



+2

160	162						
-----	-----	--	--	--	--	--	--

+5

160	165						
-----	-----	--	--	--	--	--	--

+10

110	120						
-----	-----	--	--	--	--	--	--

Avant - après !

	165	
--	-----	--

	169	
--	-----	--

	173	
--	-----	--

	187	
--	-----	--

	190	
--	-----	--

	196	
--	-----	--

Marie a acheté 12 pommes rouges et 14 pommes rouges. **Combien de pommes a-t-elle en tout ?**

Calcul : _____

Réponse : _____

$8 + \dots = 10$

$1 + \dots = 10$

$4 + \dots = 10$

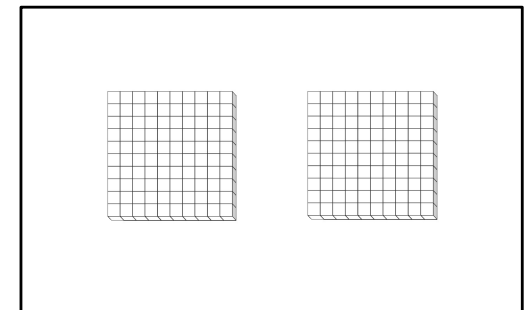
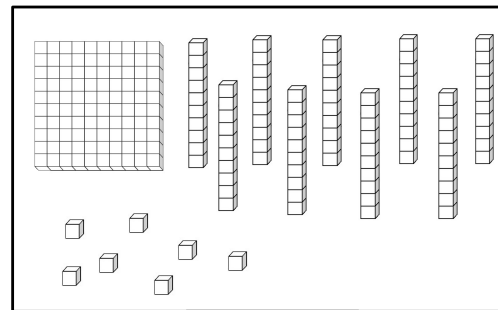



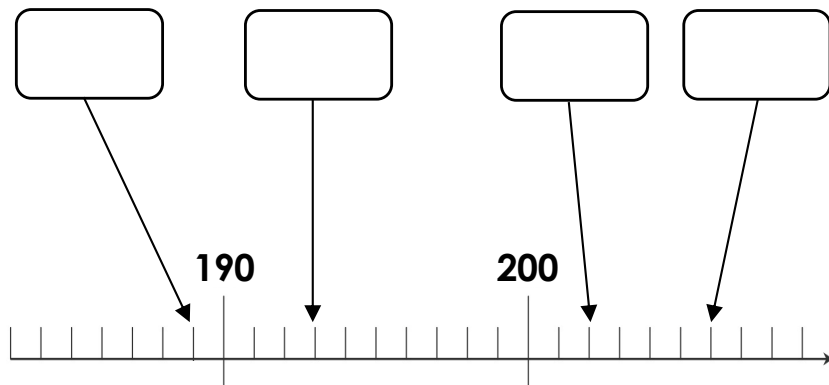
$5 + \dots = 10$

$2 + \dots = 10$

$6 + \dots = 10$

$3 + \dots = 10$

$0 + \dots = 10$

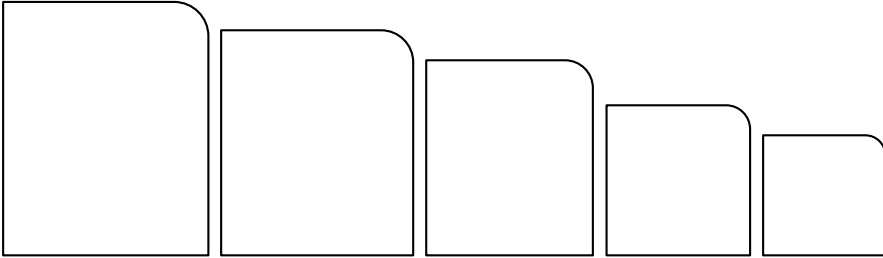


Tu as acheté 10 carottes, 12 aubergines et 6 concombres. **Combien de légumes as-tu acheté ?**

Calcul : _____

Réponse : _____

193 - 187 - 201 - 199 - 203



$30 + 10 = \dots\dots\dots$

$90 + 10 = \dots\dots\dots$

$20 + 20 = \dots\dots\dots$

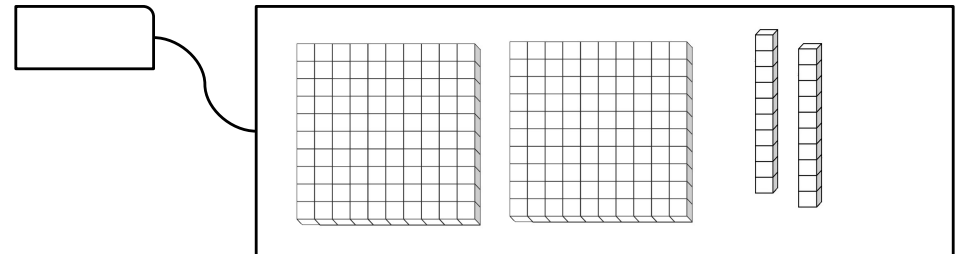
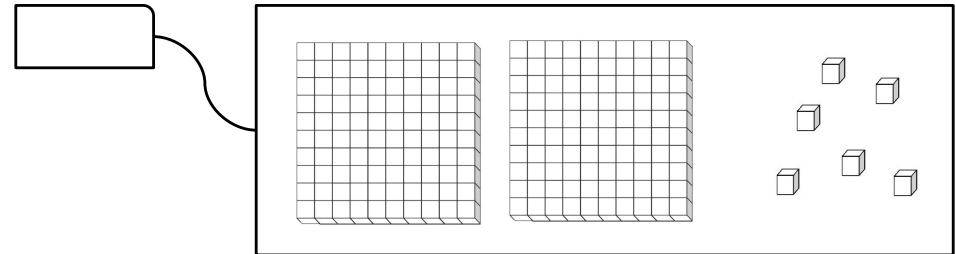
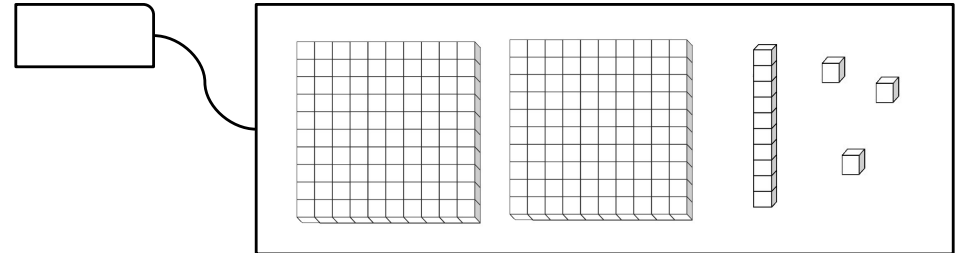
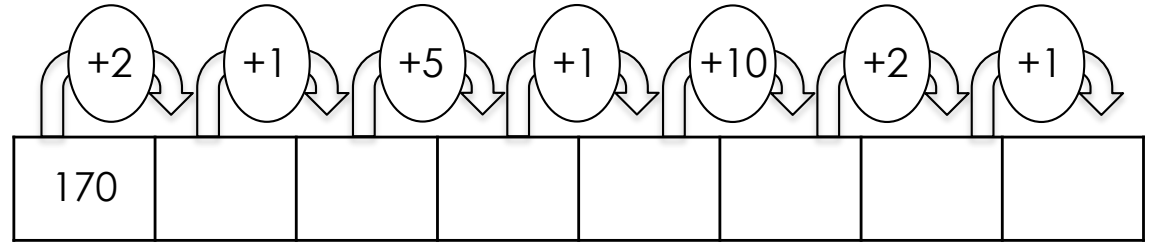
$40 + 40 = \dots\dots\dots$

$40 + 30 = \dots\dots\dots$

$30 + 70 = \dots\dots\dots$


$10 + 50 = \dots\dots\dots$

$40 + 50 = \dots\dots\dots$



avant	nombre	après
	133	
	139	
	142	
	145	
	149	

- Dessine un rond à l'intérieur du rond.
- Dessine un triangle sur le rond.
- Dessine un rectangle à droite du rond.
- Dessine un carré sous le rond.



$20 + 40 = \dots\dots\dots$

$80 + 20 = \dots\dots\dots$

$50 + 50 = \dots\dots\dots$

$50 + 30 = \dots\dots\dots$

$90 + 10 = \dots\dots\dots$

$70 + 10 = \dots\dots\dots$

$10 + 10 = \dots\dots\dots$

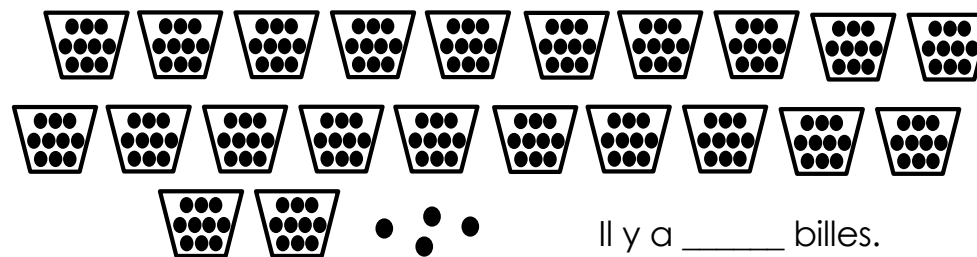
$50 + 20 = \dots\dots\dots$

$60 + 10 = \dots\dots\dots$

$40 + 60 = \dots\dots\dots$

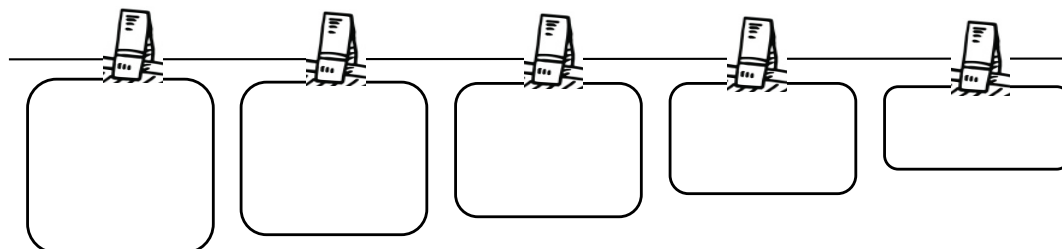
$30 + 30 = \dots\dots\dots$

$60 + 60 = \dots\dots\dots$



Il y a _____ billes.

210 - 204 - 215 - 201 - 211



$100 + 40 = \dots\dots\dots$ $20 + 100 = \dots\dots\dots$

$100 + 50 = \dots\dots\dots$ $100 + 10 = \dots\dots\dots$

$90 + 100 = \dots\dots\dots$ $100 + 30 = \dots\dots\dots$

$60 + 100 = \dots\dots\dots$ $100 + 70 = \dots\dots\dots$

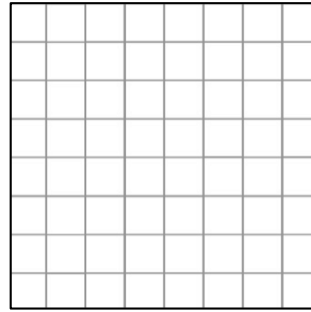
$100 + 0 = \dots\dots\dots$ $80 + 100 = \dots\dots\dots$

< ou >

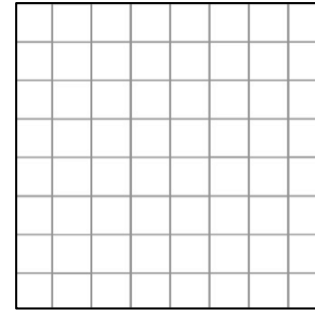
$200 \text{ ____ } 204$ $203 \text{ ____ } 211$ $198 \text{ ____ } 205$

$215 \text{ ____ } 205$ $220 \text{ ____ } 210$ $214 \text{ ____ } 195$

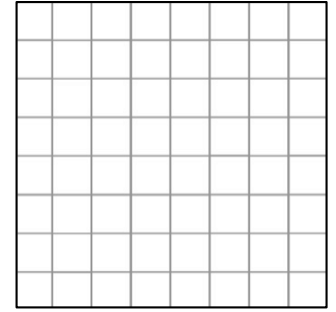
Dessine un carré.



Dessine un rectangle.



Dessine un triangle.



+2

200

202



+5

200

205



+10

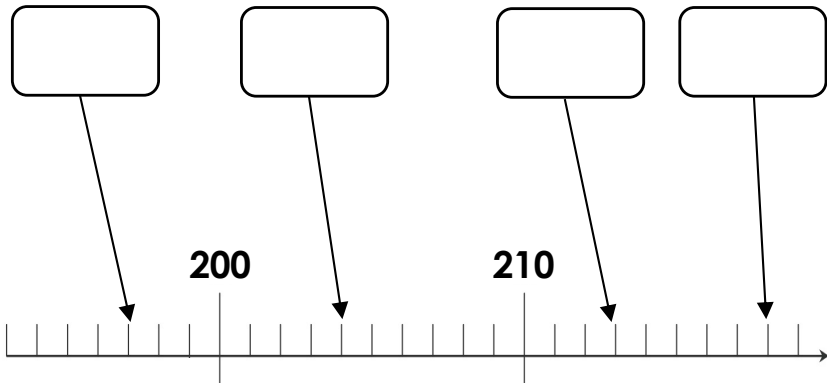
140

150



200

210



10 Fiche révision mathématiques

Prénom : _____

$18 + \dots = 20$

$11 + \dots = 20$

$14 + \dots = 20$

$15 + \dots = 20$

$12 + \dots = 20$

$16 + \dots = 20$

$13 + \dots = 20$

$10 + \dots = 20$

221 - 215 - 222 - 217 - 205

$2 + \dots = 10$

$1 + \dots = 10$

$7 + \dots = 10$

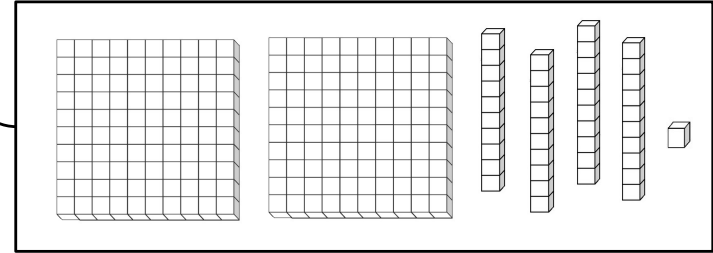
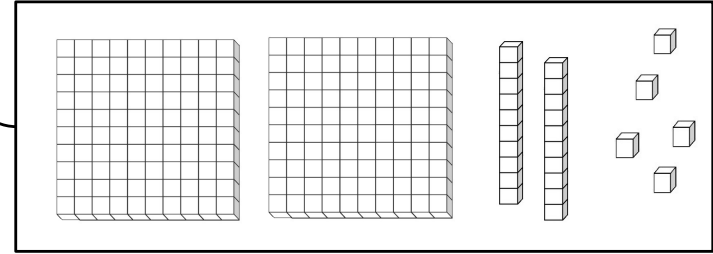
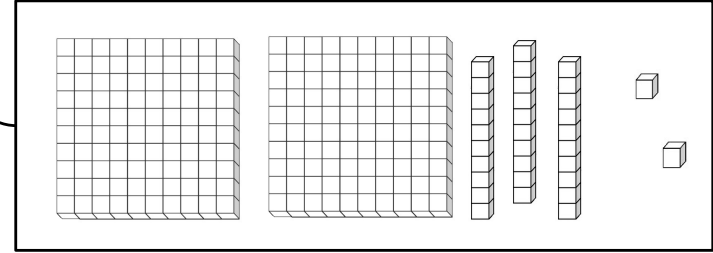
$3 + \dots = 10$

$0 + \dots = 10$

$9 + \dots = 10$

$6 + \dots = 10$

$4 + \dots = 10$



198	199						
-----	-----	--	--	--	--	--	--

207	208						
-----	-----	--	--	--	--	--	--

211	212						
-----	-----	--	--	--	--	--	--